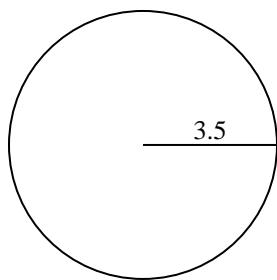


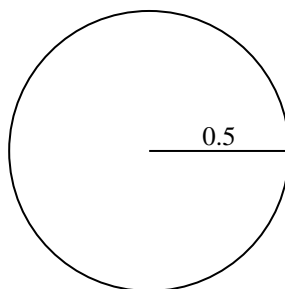


Find the circumference (in cm) of the circle. Circles are not to scale.

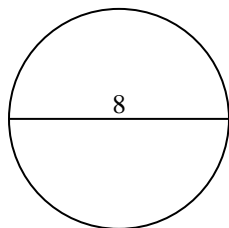
1)



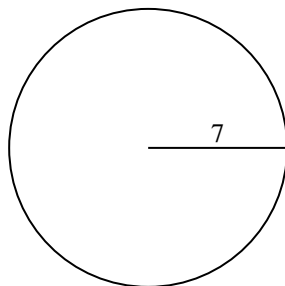
2)



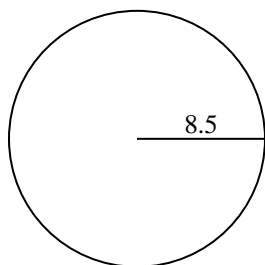
3)



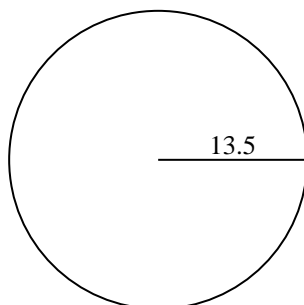
4)



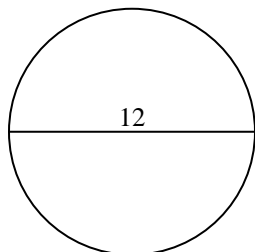
5)



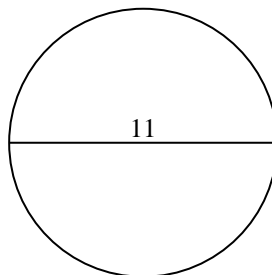
6)



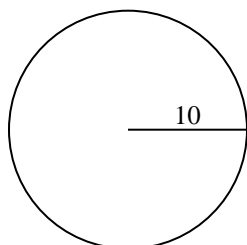
7)



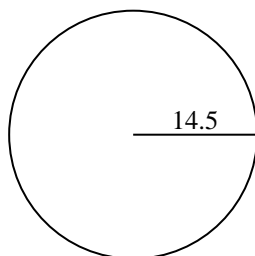
8)



9)



10)



**Answers**

1. \_\_\_\_\_

2. \_\_\_\_\_

3. \_\_\_\_\_

4. \_\_\_\_\_

5. \_\_\_\_\_

6. \_\_\_\_\_

7. \_\_\_\_\_

8. \_\_\_\_\_

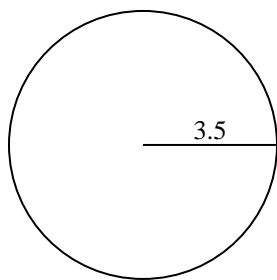
9. \_\_\_\_\_

10. \_\_\_\_\_

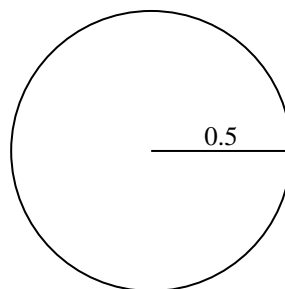


Find the circumference (in cm) of the circle. Circles are not to scale.

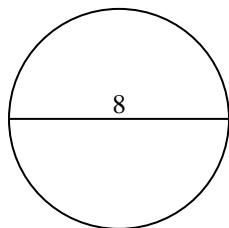
1)



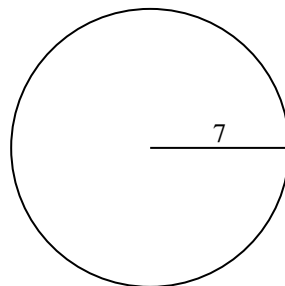
2)



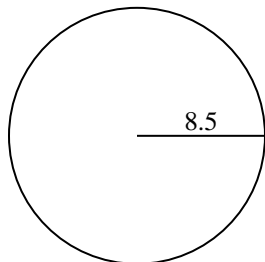
3)



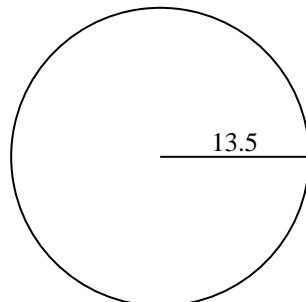
4)



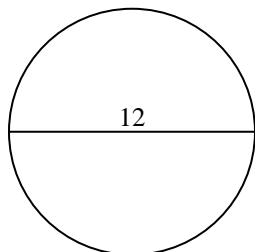
5)



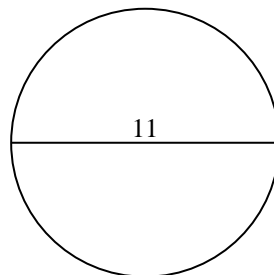
6)



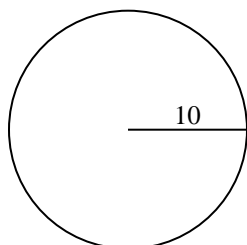
7)



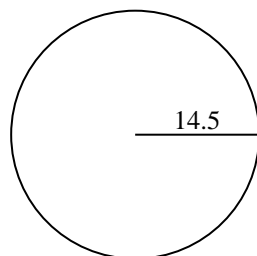
8)



9)



10)

**Answers**

1. 21.99 cm
2. 3.14 cm
3. 25.13 cm
4. 43.98 cm
5. 53.41 cm
6. 84.82 cm
7. 37.7 cm
8. 34.56 cm
9. 62.83 cm
10. 91.11 cm



Find the circumference (in cm) of the circle. Circles are not to scale.

**Answers**

84.82 cm

53.41 cm

62.83 cm

21.99 cm

3.14 cm

91.11 cm

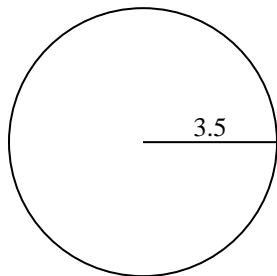
25.13 cm

43.98 cm

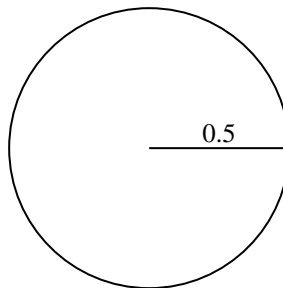
37.7 cm

34.56 cm

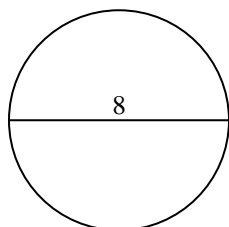
1)



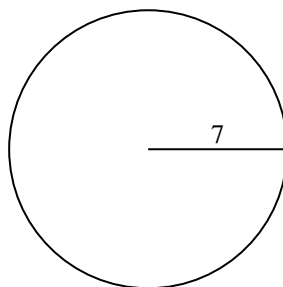
2)



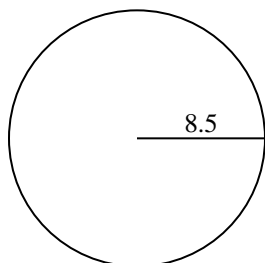
3)



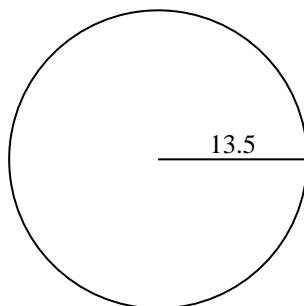
4)



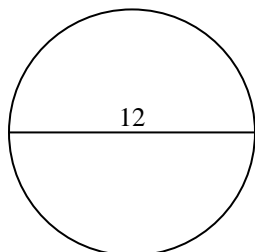
5)



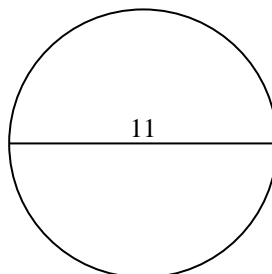
6)



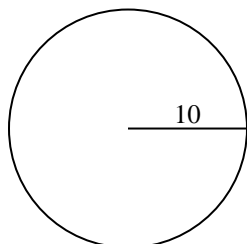
7)



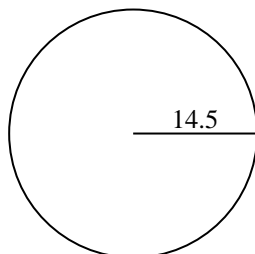
8)



9)



10)



- 1. \_\_\_\_\_
- 2. \_\_\_\_\_
- 3. \_\_\_\_\_
- 4. \_\_\_\_\_
- 5. \_\_\_\_\_
- 6. \_\_\_\_\_
- 7. \_\_\_\_\_
- 8. \_\_\_\_\_
- 9. \_\_\_\_\_
- 10. \_\_\_\_\_